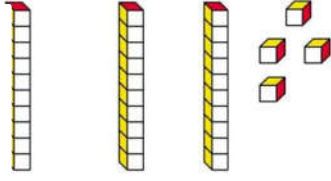
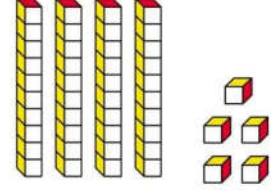




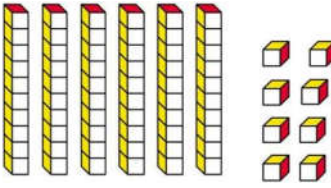
1 . Aşağıda taban blokları ile verilen sayıları altlarına yazınız.



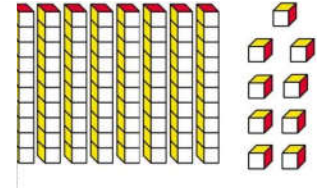
.....



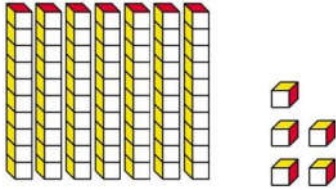
.....



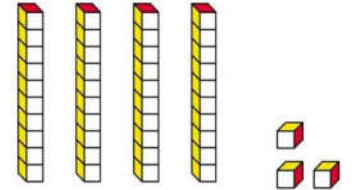
.....



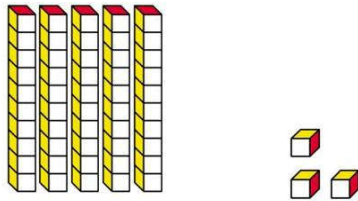
.....




.....



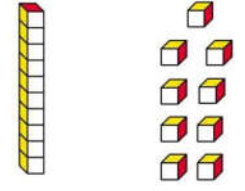
.....



.....



.....



.....

2. Aşağıda verilen tabloları dolduralım ve sayıları bulalım.

3 Onluk	7 Birlık
.....

.....

9 Onluk	4 Birlık
.....

.....

1 Onluk	6 Birlık
.....

.....

9 Onluk	6 Birlık
.....

.....

8 Onluk	0 Birlık
.....

.....

0 Onluk	7 Birlık
.....

.....

5 Onluk	0 Birlık
.....

.....

7 Onluk	8 Birlık
.....

.....

9 Onluk	6 Birlık
.....

.....

9 Onluk	7 Birlık
.....

.....

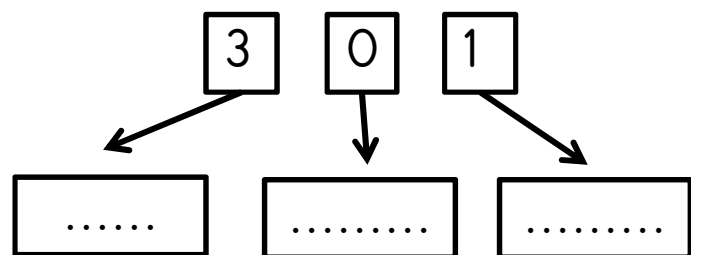
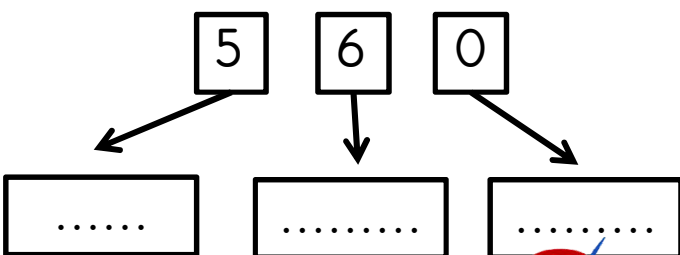
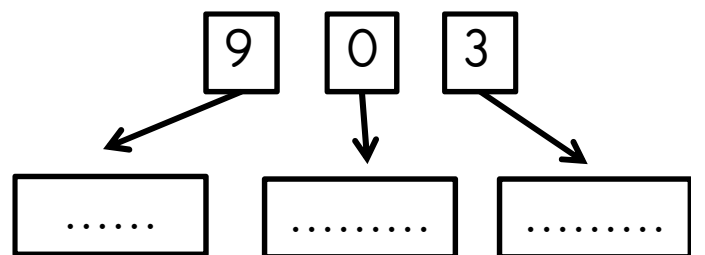
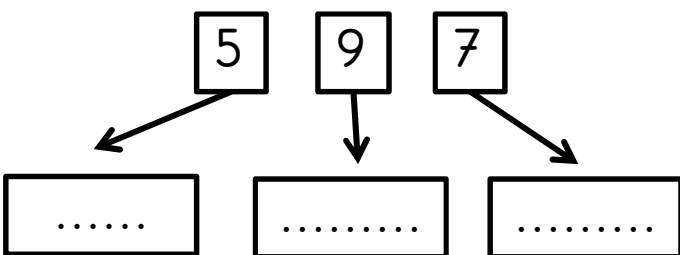
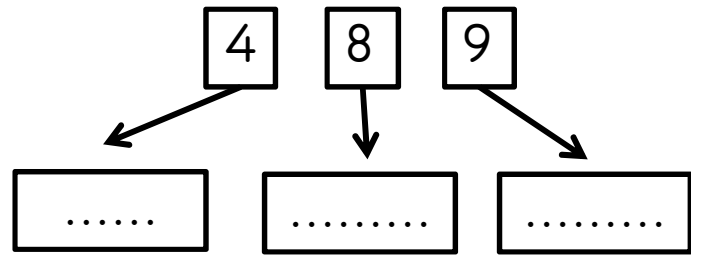
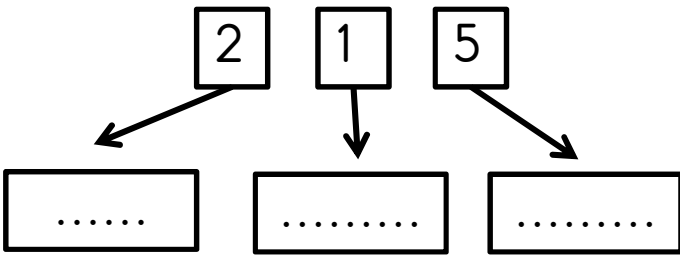
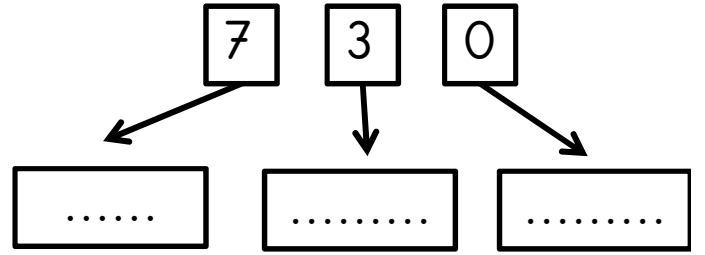
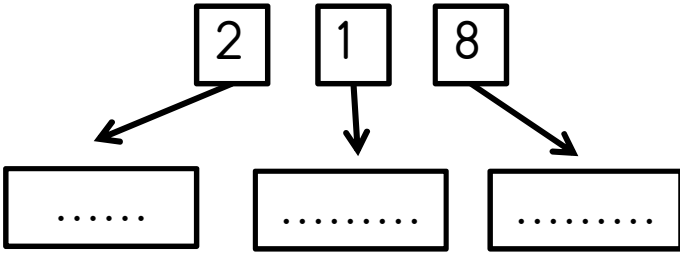
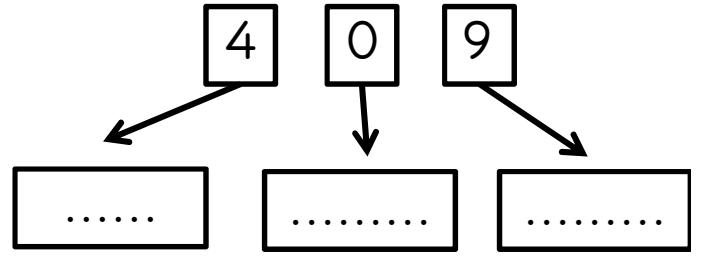
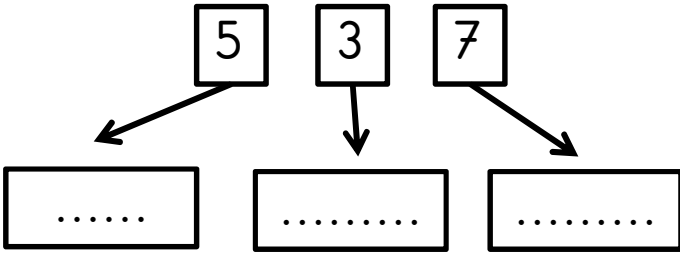
3 Onluk	5 Birlık
.....

.....

6 Onluk	5 Birlık
.....

.....

3. Verilen rakamlardan oluşan üç tane farklı iki basamaklı doğal sayı yazınız.



4. Yüzlük, onluk ve birlik sayıları verilen iki basamaklı doğal sayıları yazalım.

❖ 6 onluk ve 5 birlikten oluşan sayı: →

❖ 3 onluk ve 6 birlik oluşan sayı: →

❖ 7 birlik ve 9 onluk oluşan sayı: →

❖ 8 onluk ve 9 birlikten oluşan sayı: →

❖ 1 onluk ve 5 birlikten oluşan sayı: →

❖ 3 onluk ve 1 birlik oluşan sayı: →

❖ 7 birlik ve 6 onluk oluşan sayı: →

❖ 4 onluk ve 1 birlikten oluşan sayı: →

❖ 8 onluk oluşan sayı. →

❖ 5 onluk ve 3 birlikten oluşan sayı: →

❖ 4 birlik ve 6 onluk oluşan sayı: →

❖ 2 birlik ve 8 onluktan oluşan sayı: →

❖ 5 onluk ve 8 birlik oluşan sayı. →

❖ 3 onluk ve 5 birlikten oluşan sayı: →

❖ 6 birlik ve 4 onluktan oluşan sayı: →

❖ 8 birlik ve 2 onluktan oluşan sayı: →