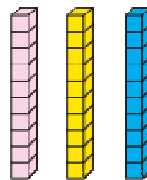
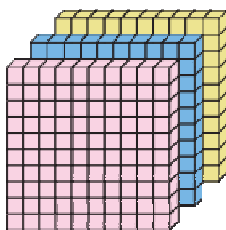
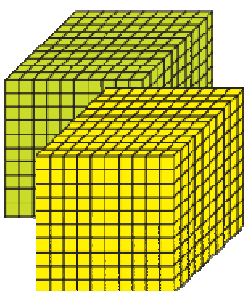

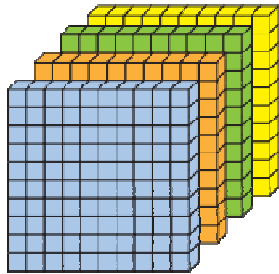
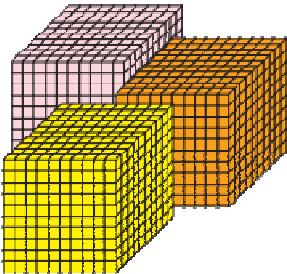
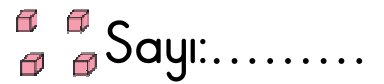
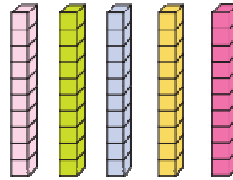
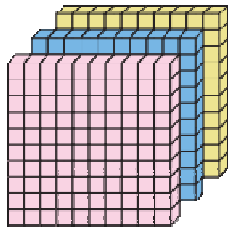
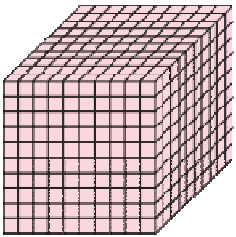
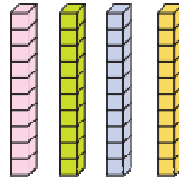
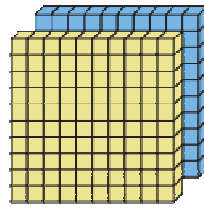
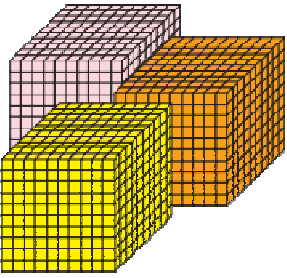
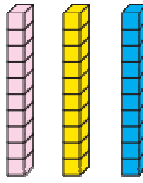
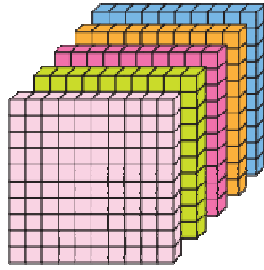
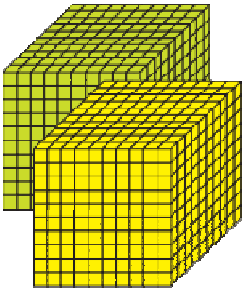
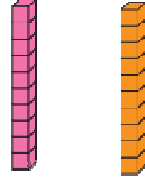
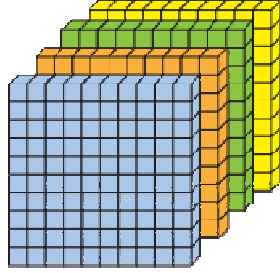
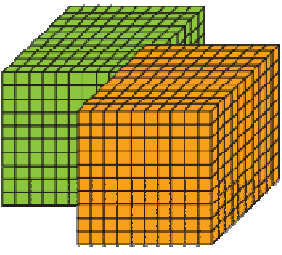




1. Bloklarla gösterilen sayıları yazınız.



2. Aşağıdaki abaküslerde modellenen sayıları ve okunuşlarını yazınız.

Abacus showing 1 red bead on the Bn rod, 4 blue beads on the Y rod, 1 orange bead on the O rod, and 3 green beads on the B rod.

.....

.....

Abacus showing 3 red beads on the Bn rod, 5 blue beads on the Y rod, 0 beads on the O rod, and 3 green beads on the B rod.

.....

.....

Abacus showing 3 red beads on the Bn rod, 0 beads on the Y rod, 1 orange bead on the O rod, and 2 green beads on the B rod.

.....

.....

Abacus showing 5 red beads on the Bn rod, 4 blue beads on the Y rod, 3 orange beads on the O rod, and 0 beads on the B rod.

.....

.....

Abacus showing 6 red beads on the Bn rod, 3 blue beads on the Y rod, 3 orange beads on the O rod, and 1 green bead on the B rod.

.....

.....

Abacus showing 5 red beads on the Bn rod, 3 blue beads on the Y rod, 3 orange beads on the O rod, and 3 green beads on the B rod.

.....

.....

Abacus showing 4 red beads on the Bn rod, 0 beads on the Y rod, 3 orange beads on the O rod, and 0 beads on the B rod.

.....

.....

Abacus showing 2 red beads on the Bn rod, 0 beads on the Y rod, 0 beads on the O rod, and 4 green beads on the B rod.

.....

.....

Abacus showing 5 red beads on the Bn rod, 3 blue beads on the Y rod, 3 orange beads on the O rod, and 3 green beads on the B rod.

.....

.....

3. Aşağıda okunuşu verilen sayıları yazalım.

➤ Bin altı yüz yetmiş

.....

➤ Dokuz bin dört

.....

➤ Bin beş yüz yirmi

.....

➤ Dört bin yetmiş altı

.....

➤ Yedi bin elli

.....

➤ Üç bin on yedi

.....

➤ Dokuz bin yedi yüz

.....

➤ On bin yirmi dokuz

.....

➤ Beş bin yüz beş

.....

➤ Altı bin yetmiş

.....

➤ Yedi bin yirmi beş

.....

➤ Bin yüz on dokuz

.....

➤ İki bin iki yüz on

.....

➤ Sekiz bin beş yüz

.....

➤ Altı bin altı yüz altı

.....

4. Aşağıda verilen sayıların okunuşunu yazalım

➤ 3 020 ➡

➤ 1 040 ➡

➤ 7 252 ➡

➤ 3 203 ➡

➤ 5 007 ➡

➤ 8 070 ➡

➤ 1 700 ➡

➤ 8 120 ➡

➤ 7 508 ➡

➤ 2 302 ➡

➤ 6 024 ➡

➤ 4 040 ➡

➤ 2 222 ➡

➤ 9 203 ➡

➤ 7 007 ➡