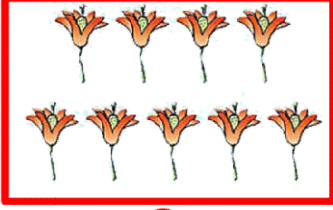
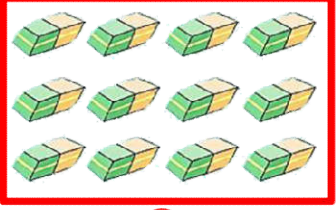
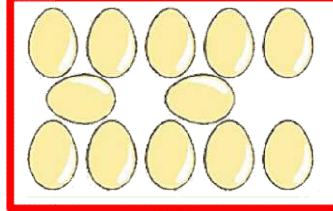
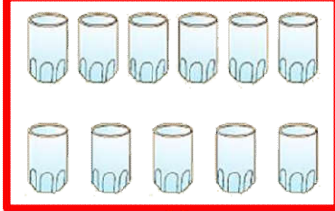


DESTE VE DÜZİNE

1. Aşağıdaki nesnelere bir deste olanı işaretleyiniz.




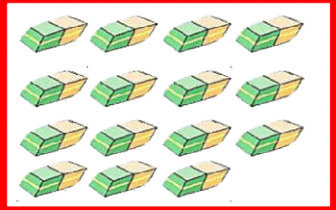
2. Aşağıdaki nesnelere bir düzine olanı işaretleyiniz.



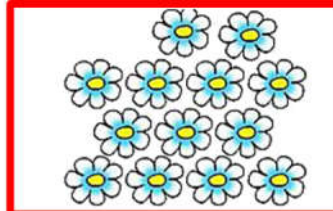

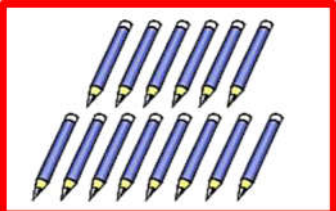
3. Aşağıdaki çileklerin 1 düzinesini boyayınız.



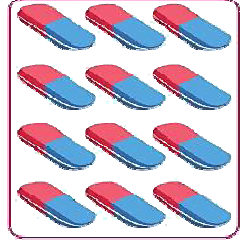



4. Aşağıdaki varlıkların birer destesini işaretleyiniz.






5. Aşağıdaki varlıkların birer düzinesini işaretleyiniz.






6. Aşağıdaki varlıkların sayılarını deste ve düzine olarak belirtiniz.



7. Aşağıdaki varlıkları desteye tamamlayınız.



8. Aşağıdaki varlıkları düzineye tamamlayınız.



9. Aşağıdaki varlıkların sayılarını deste ve düzine olarak belirtiniz.

