

DESTE VE DÜZİNE -2-

1. Aşağıdaki nesnelerin kaç deste olduğunu yazınız.




..... deste.




..... deste.

2. Aşağıdaki nesnelerin kaç düzine olduğunu yazınız.








..... düzine.



..... düzine.

3. Aşağıdaki guruplardan deste olanları işaretleyiniz.



4. Aşağıdaki guruplardan düzine olanları işaretleyiniz.

