





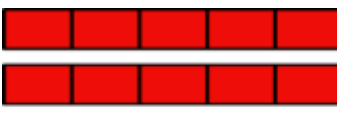
Etkileşimli Eğitim
Bileşik ve Tam Sayılı Kesirler


1.  Yandaki şekli ifade eden kesir hangisidir?
A) $\frac{7}{3}$ B) $\frac{3}{7}$ C) $\frac{3}{2}$ D) $\frac{1}{3}$


2.  Yandaki şekli ifade eden kesir hangisidir?
A) $\frac{5}{6}$ B) $\frac{29}{6}$ C) $\frac{5}{29}$ D) $\frac{1}{5}$


3.  Yandaki şekli ifade eden kesir hangisidir?
A) $\frac{3}{31}$ B) $\frac{28}{7}$ C) $\frac{31}{7}$ D) $\frac{3}{7}$


4.  Yandaki şekli ifade eden kesir hangisidir?
A) $\frac{3}{15}$ B) $\frac{15}{2}$ C) $\frac{3}{17}$ D) $\frac{17}{3}$


5.  Yandaki şekli ifade eden kesir hangisidir?
A) $\frac{5}{13}$ B) $\frac{15}{5}$ C) $\frac{5}{15}$ D) $\frac{13}{5}$

6.  Yandaki şekli ifade eden kesir hangisidir?
A) $2\frac{2}{5}$ B) $\frac{2}{5}$ C) $\frac{4}{5}$ D) $\frac{4}{2}$

7.  Yandaki şekli ifade eden kesir hangisidir?
A) $2\frac{1}{3}$ B) $3\frac{1}{3}$ C) $3\frac{10}{3}$ D) $\frac{1}{3}$

8.  Yandaki şekilden iki parça çıkarılırsa aşağıdaki kesirlerden hangisi kadarı kalır?
A) $3\frac{6}{4}$ B) $3\frac{2}{6}$ C) $3\frac{4}{6}$ D) $\frac{4}{6}$

9.  Yandaki şekilde gösterilen bileşik kesir aşağıdakilerden hangisine denktir?
A) $7\frac{3}{4}$ B) $4\frac{7}{3}$ C) $3\frac{4}{7}$ D) $4\frac{3}{7}$

10.  Yandaki şekilde gösterilen tam sayılı kesir aşağıdakilerden hangisine denktir?
A) $\frac{5}{2}$ B) $\frac{15}{5}$ C) $\frac{5}{17}$ D) $\frac{17}{5}$