

Zamanı Ölçme -1 -

1. Aşağıdaki saatlerin gündüz saatine göre kaç gösterdiğini altına yazınız.




Saat:.....




Saat:.....




Saat:.....




Saat:.....




Saat:.....



Saat:.....




Saat:.....



Saat:.....




Saat:.....



Saat:.....



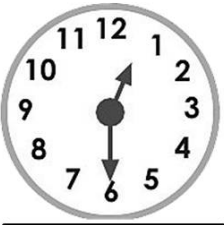
Saat:.....




Saat:.....



Saat:.....



Saat:.....




Saat:.....




Saat:.....


2. Aşağıdaki saatlerin gece saatine göre kaç gösterdiğini altına yazınız.



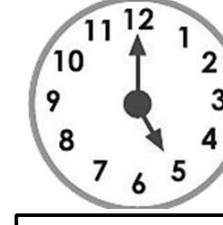
Saat:.....




Saat:.....




Saat:.....




Saat:.....



Saat:.....




Saat:.....



Saat:.....




Saat:.....




Saat:.....




Saat:.....




Saat:.....



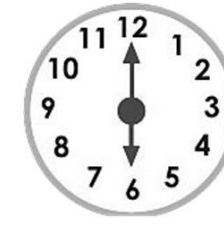
Saat:.....




Saat:.....



Saat:.....



Saat:.....



Saat:.....

3. Aşağıdaki saatlerin gece ve gündüze göre kaç gösterdiğini altına yazınız.



Gündüz:....

Gündüz:....

Gündüz:....

Gündüz:....

Gece:.....

Gece:.....

Gece:.....

Gece:.....



Gündüz:....

Gündüz:....

Gündüz:....

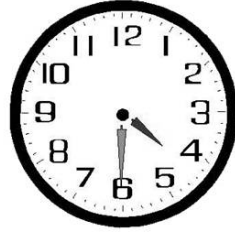
Gündüz:....

Gece:.....

Gece:.....

Gece:.....

Gece:.....



Gündüz:....

Gündüz:....

Gündüz:....

Gündüz:....

Gece:.....

Gece:.....

Gece:.....

Gece:.....

4. Aşağıdaki saatlerin gece ve gündüze göre kaç gösterdiğini altına yazınız.



Gündüz:....

Gündüz:....

Gündüz:....

Gündüz:....

Gece:.....

Gece:.....

Gece:.....

Gece:.....



Gündüz:....

Gündüz:....

Gündüz:....

Gündüz:....

Gece:.....

Gece:.....

Gece:.....

Gece:.....



Gündüz:....

Gündüz:....

Gündüz:....

Gündüz:....

Gece:.....

Gece:.....

Gece:.....

Gece:.....