

1. Aşağıdaki saatlerin kaçı gösterdiğini altına yazınız.



saat:



saat:.....



saat:



saat:



saat:




saat:



saat:



saat:



saat:




saat:



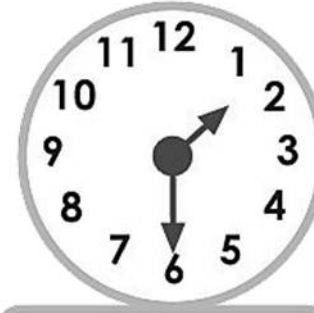
saat:




saat:



saat:



saat:



saat:



saat:

2. . Aşağıdaki saatleri yelkovan ve akrebin konumlarını çiziniz.

